


Coordinates

To start off with, here's some basic stuff about **coordinates** which will be really useful for the rest of this section.

The Four Quadrants

- 1) A graph has **four different quadrants** (regions). The top-right region is the easiest because here **all the coordinates in it are positive**.
- 2) You have to be careful in the **other regions** though, because the x - and y -coordinates could be **negative**, and that makes them much more difficult.
- 3) Coordinates are always written in brackets like this: (x, y)
— remember x is **across**, and y is **up**.



Finding Coordinates Using Geometrical Information

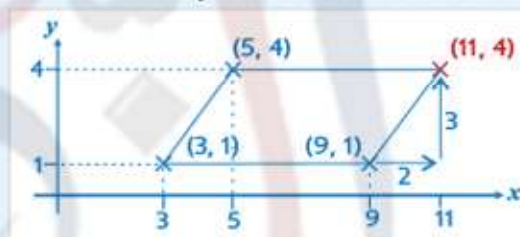
EXAMPLE:

A parallelogram has vertices $(3, 1)$, $(5, 4)$ and $(9, 1)$.

The x and y coordinates of its fourth vertex are both positive. What are their values?

Do a quick **sketch** and it's very easy — just mark in the 4th vertex by eye.

Check: to get from $(3, 1)$ to $(5, 4)$ you go **along 2 and up 3** — the missing point needs to be the same distance from $(9, 1)$.



Finding the Midpoint of a Line Segment

Finding the coordinates of a midpoint is pretty easy...

Find the average of the two x -coordinates, then do the same for the y -coordinates. These will be the coordinates of the midpoint.

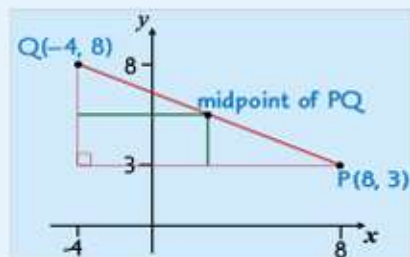
A line segment is part of a line. Lines continue forever in both directions, but line segments have two end points. Things that are actually line segments are often referred to as lines though.

EXAMPLE:

Point P has coordinates $(8, 3)$ and point Q has coordinates $(-4, 8)$. Find the midpoint of the line PQ.

- 1) Average of x -coordinates = $\frac{8 + (-4)}{2} = 2$
- 2) Average of y -coordinates = $\frac{3 + 8}{2} = 5.5$

So, coordinates of midpoint = $(2, 5.5)$



See p.152 for finding the length of a line segment.

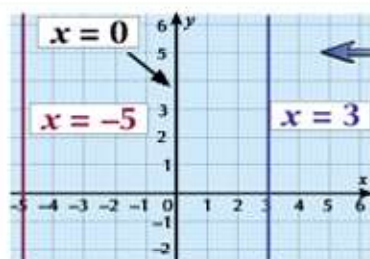
Midpoints — add the x 's together and halve, then do the same for the y 's

Don't forget the basics otherwise you'll lose marks needlessly — x comes before y in (x, y) , and x goes a**CROSS** while y goes up and down. Finding a line's midpoint is as simple as finding the average of the x 's and y 's.

Straight-Line Graphs

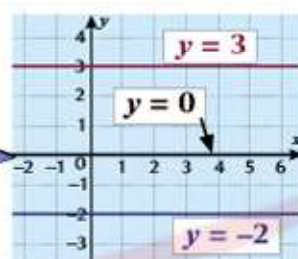
There are some **straight lines** you should be able to immediately recognise from their **equation**.

Horizontal and Vertical lines: ' $x = a$ ' and ' $y = a$ '



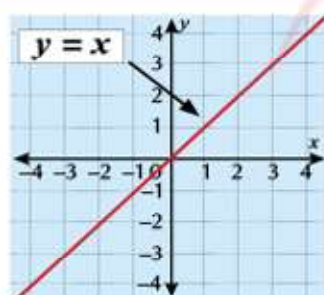
$x = a$ is a vertical line through a on the x -axis

$y = a$ is a horizontal line through a on the y -axis



A common error is to mix up $x = 3$ and $y = 3$, etc. Remember — all the points on $x = 3$ have an x -coordinate of 3, and all the points on $y = 3$ have a y -coordinate of 3.

The Main Diagonals: ' $y = x$ ' and ' $y = -x$ '

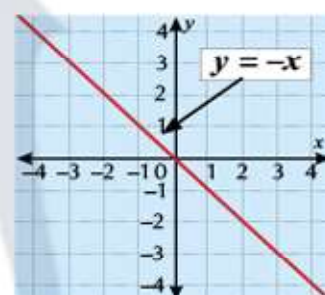


$y = x$ is the main diagonal that goes **UPHILL** from left to right.

The x - and y -coordinates of each point are the same.

$y = -x$ is the main diagonal that goes **DOWNHILL** from left to right.

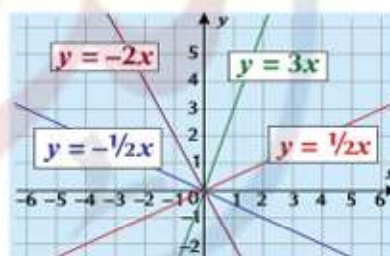
The x - and y -coordinates of each point are negatives of each other, e.g. $(-4, 4)$.



Other Sloping Lines Through the Origin: ' $y = ax$ ' and ' $y = -ax$ '

$y = ax$ and $y = -ax$ are the equations for A SLOPING LINE THROUGH THE ORIGIN

The value of a (known as the **gradient**) tells you the steepness of the line. The bigger a is, the steeper the slope. A **MINUS SIGN** tells you it slopes **DOWNHILL**.



See p.87 for how to find a gradient.

Learn to Recognise Straight Lines from Their Equations

All other straight-line equations just contain '**something x , something y and a number**'.

EXAMPLE:

Decide whether each of the following are equations of straight lines.

$$2y - 4x = 7 \quad y = x^2 + 3 \quad xy + 3 = 0 \quad 6y - 8 = x \quad \frac{2}{y} - \frac{1}{x} = 7$$

Straight lines: $2y - 4x = 7$

$6y - 8 = x$

Not straight lines: $y = x^2 + 3$

$xy + 3 = 0$

$\frac{2}{y} - \frac{1}{x} = 7$

These equations only have **something x , something y and a number**. These 'terms' can be added or subtracted in any order.

x^2 , xy , $\frac{2}{y}$ and $\frac{1}{x}$ mean that these **aren't** straight-line equations.

Simple lines you have to learn

Vertical line: $x = a$, horizontal line: $y = a$, main diagonals: $y = x$ and $y = -x$. Other types of straight line are a bit harder, but drawing a sketch will help if you're stuck — see the next page for more.



Plotting Straight-Line Graphs

You could be asked to **draw** a **straight-line graph** in the exam. We'll cover **two** methods on this page.

The 'Table of 3 Values' Method

You can **easily** draw the graph of **any equation** using this **easy** method:

Don't forget to use a ruler to draw your line
— you can lose exam marks if you don't.

- 1) Choose 3 values of x and draw up a table.
- 2) Work out the corresponding y -values.
- 3) Plot the coordinates and draw the line.

If it's a **straight-line equation**, the 3 points will be in a **straight line** with each other. If they aren't, you need to go back and **CHECK YOUR WORKING**.

EXAMPLE: Draw the graph of $y = 2x - 3$ for values of x from -1 to 4 .

- 1) Draw up a table with some suitable values of x .

x	0	2	4
y			

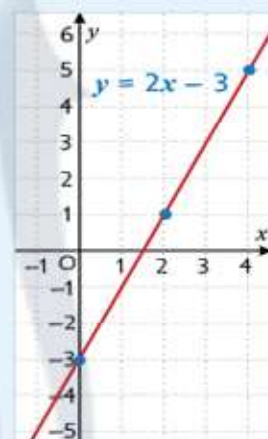
- 2) Find the y -values by putting each x -value into the equation:

$$\text{When } x = 4, y = 2x - 3 \\ = 2 \times 4 - 3 = 5$$

x	0	2	4
y	-3	1	5

- 3) Plot the points and draw the line.

The table gives the points $(0, -3)$, $(2, 1)$ and $(4, 5)$



The ' $x = 0, y = 0$ ' Method

- 1) Set $x = 0$ in the equation, and find y — this is where it crosses the y -axis.
- 2) Set $y = 0$ in the equation and find x — this is where it crosses the x -axis.
- 3) Plot these two points and join them up with a straight line.

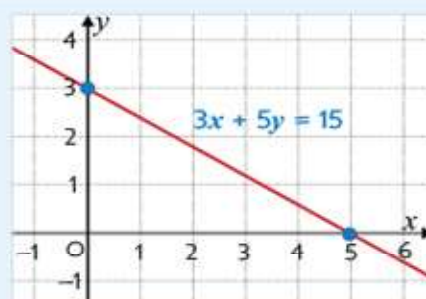
Make sure it's definitely a straight line before using this method — have a look at the previous page to see how you can check.

EXAMPLE: Draw the graph of $3x + 5y = 15$ between $x = -1$ and $x = 6$.

Putting $x = 0$ gives " $5y = 15$ " $\Rightarrow y = 3$

Putting $y = 0$ gives " $3x = 15$ " $\Rightarrow x = 5$

So plot $(0, 3)$ and $(5, 0)$ on the graph and join them up with a straight line.



Drawing straight-line graphs isn't as scary with these simple methods

This page gives you two simple methods for drawing straight-line graphs. Usually, you'll be able to use whichever you find easier — but learn them both, just in case you're told to use a specific one in the exam.